

BPhO Round 1 Marking- November 2019

Updated 9th Dec 2019

Thank you for taking part in marking the scripts. It is of enormous benefit to young students to be able to take part in these competitions, tackling much harder problems than they normally get, and be able to have them marked by physicists who know what they are doing. It is because of your expertise in the subject that it is possible to do this. Exams marked by non-specialists are more of a tick box exercise, which is of little value in stretching students to grasp the subject at a deeper level. The layout of the work may be annoying. That is a national problem and we are not going to change that easily, although we do our best, as do the teachers of these students.

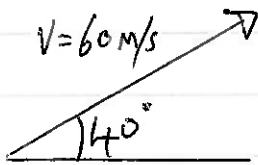
- Positive marking is the aim. Marks should be awarded for good physics, even if the reasoning does not follow the mark scheme. Alternative routes to the answers can be allowed.
- Significant figures. This is not a test of significant figures. A leeway of ± 1 sig fig is generally allowed, but we are not being strict at all in penalising for sig figs. If the published solution gives 3, allow 2 or 4 in the students answer. However, unless they have put down all of the figures on their calculator, there are no questions this year that are likely to invoke a sig fig penalty.
- Some answers can be left in fractional form.
- Units should be given for the final answer. It may be that the unit is given a little earlier and that it does not appear on the very last line. Some allowance may be made if it is clear that the unit has been used a line or two earlier.
- If the units are a required part of the answer for the mark, they must be there.
- Error carried forward (ecf) is allowed provided ridiculous results do not start appearing. A mark is lost for the initial mistake, but then they can carry on (if it is possible) to gain some of the subsequent marks for the next one or two steps only. You do not need to spend time working through laborious arithmetic calculations if there is a possible ecf. Just make a decision as to whether they should have the single mark or not.
- You are not required to spend time deciphering scribble.
- There may be a lot of working for the answer. If they are almost there, you may give the mark even if there is a numerical mistake in the last line. Use your judgement. The ticks for the marks are not exact i.e. they are for the idea and almost getting there.
- Full marks are awarded for the correct answer, provided that there is some supporting working and it is not a "show that" question.
- You must follow the mark scheme so that we mark CONSISTENTLY. Do not make your own independent mark scheme.
- Avoid relying on your memory for the mark allocation. You need the mark scheme open beside you.

If you need advice, email Robin Hughes rh584@cam.ac.uk . I will respond promptly. You can send a phone photo or just ask a question. We want to be fair in the marking, so your good judgment should be acceptable.

1. Do not mix up students' names when entering marks.
2. Add up the marks correctly. Check your addition. For each little section, note the total in a circle, as in the mark scheme. Then note the total for the page at the bottom in two parallel lines to distinguish it.
3. Do not leave papers in any unsecured place. The loss of papers would be serious. They are confidential.

Nov 2019 Round 1 Section 1.

(a)



$$(i) \quad V_v = u - gt \\ = 60 \sin 40 - 9.81 \times 3 \\ = \underline{9.14 \text{ m/s}}$$

only mark if given as V_v, V_H .

$$V_H = 46.0 \text{ m/s} \\ \therefore V = \underline{46.9 \text{ m/s}} \text{ at } \theta = \tan^{-1} \frac{9.137}{45.96} \\ = \underline{11.2^\circ \text{ above horizontal}}$$

[magnitude, direction]

(ii)

$$S_v = ut - \frac{1}{2}gt^2 \\ = u \sin \theta \cdot t - \frac{1}{2}gt^2 \\ = 60 \sin 40 \cdot 3 - \frac{1}{2} \cdot 9.81 \times 3^2 \\ = \underline{71.6 \text{ m}}$$

$$S_H = 60 \cos 40 \cdot 3 \\ = \underline{138 \text{ m}}$$

(4)

(b) Drone: $\vec{s} = 2t\hat{i} + 6t\hat{j}$
 $\vec{v} = 2\hat{i} + 6\hat{j}$

(i) speed = $\sqrt{2^2 + 6^2} = 2\sqrt{10} = \underline{6.3 \text{ m/s}}$

(ii) Bearing at $t=2\text{s}$ is $\tan \theta = \frac{6}{2} = \frac{1}{3}$

$$\tan \theta = \frac{6}{2} = \frac{1}{3}$$

$$\theta = 18.4^\circ = 0.18 \cdot 4^\circ$$

(iii) $\underline{a = 0}$

(slow 18.4°)

(3)

(c) Areal density of paper $\sim 100 \text{ g/m}^2$
 pinhead $\approx 1 \text{ mm} \times 1 \text{ mm}$
 $= 10^{-6} \text{ m}^2$

$\therefore \text{mass} = 10^{-6} \times 100 \text{ g}$
 $= 10^{-4} \text{ g}$
 $= 10^{-7} \text{ kg}$

$3 \times 10^{-8} \leq M \leq 0.9 \times 10^{-6} \text{ kg}$
 i.e. $0.3 \times 10^{-7} \leq M \leq 9 \times 10^{-7} \text{ kg}$

clear working approach ✓
 Just numbers - 0.

②

(d) [a] is $\frac{\text{M}}{\text{s}^2}$ ✓

[b] is $\frac{\text{kg}}{\text{s}^2}$ ✓

②

cross sectional area of a strand is A, by length, l.

(e) $R_{AL} = \frac{\rho_{AL} \cdot l}{A}$
 $R_s = \frac{\rho_s \cdot l}{A}$

either correct
 from using resistivity. ✓

Recable: $\frac{1}{R_c} = \frac{1}{R_{AL}} + \frac{1}{R_s} \Rightarrow R_c = \frac{R_{AL} \cdot R_s}{R_{AL} + R_s}$

correct relation (either) ✓

As the steel reduces the resistance of the cable by SR to R_c ,
 then, $R_c + SR = R_{AL}$ ✓

So $SR = R_{AL} - R_c$
 $= R_{AL} - \frac{R_{AL} \cdot R_s}{R_{AL} + R_s}$
 $= \frac{R_{AL}^2}{R_{AL} + R_s}$
 $= \frac{\rho_{AL} \cdot l}{A} \times \frac{\rho_{AL} \cdot l}{A} \frac{1}{(\rho_{AL} + \rho_s) \cdot l}$
 $= \frac{\rho_{AL} \cdot l}{A} \frac{1}{(1 + \frac{\rho_s}{\rho_{AL}})}$

$$\therefore l = \frac{GA \cdot SR}{PAE} \left(1 + 6 \cdot \frac{\rho_s}{PAE} \right)$$

✓ 'close' algebraic form for l.

$$= \frac{1.4 \times 10^{-4} \times 6 \times 5 \times 10^{-4}}{3.2 \times 10^{-8}} \left(1 + 6 \times \frac{20 \times 10^{-8}}{3.2 \times 10^{-8}} \right)$$

$$= 1.4 \times \frac{30}{3.2} \left(1 + \frac{120}{3.2} \right)$$

$$= \frac{42}{3.2} (1 + 37.5)$$

$$= 505 \text{ m}$$

$$= \underline{\underline{500 \text{ m}}}$$

✓

(5)

Density

(f)

Sinks when weight of Pt and wt. of K ^(Potassium) equal weight of Hg displaced

$$\rho_{Hg} V_{Hg} \cdot g = \rho_{Pt} \cdot V_{Pt} \cdot g + \rho_K \cdot V_K \cdot g$$

✓ condition in words or equation.

$$V_{Hg} = V_{Pt} + V_K$$

✓

$$\therefore 13.6 (V_{Pt} + 10) = 21.5 \cdot V_{Pt} + 0.89 \times 10$$

✓ correct substitution

$$V_{Pt} + 10 = \frac{21.5}{13.6} \cdot V_{Pt} + \frac{8.9}{13.6}$$

$$10 - \frac{8.9}{13.6} = V_{Pt} \left(\frac{21.5}{13.6} - 1 \right)$$

(all the marking for the answer)

$$V_{Pt} = \underline{\underline{16.1 \text{ cm}^3}} = \underline{\underline{16 \text{ cm}^3}}$$

✓

(4)

or algebraically,
In notationless form.

$$V_{Pt} + V_K = \frac{\rho_{Pt}}{\rho_{Hg}} \cdot V_{Pt} + \frac{\rho_K}{\rho_{Hg}} \cdot V_K$$

$$10 \times 0.89 + x \times 21.5 = 13.6(10 + x) \quad 0 = \left(\frac{\rho_{Pt}}{\rho_{Hg}} - 1 \right) V_{Pt} + \left(\frac{\rho_K}{\rho_{Hg}} - 1 \right) V_K$$

$$8.9 + 21.5x = 136 + 13.6x$$

$$7.9x = 127.1$$

$$x = \underline{\underline{16.1 \text{ cm}^3}}$$

$$V_{Pt} = \frac{(\rho_{Hg} - \rho_K)}{(\rho_{Pt} - \rho_{Hg})} \cdot V_K = \frac{(13.6 - 0.89)}{(21.5 - 13.6)} \cdot 10 = \underline{\underline{16.1 \text{ cm}^3}} = \underline{\underline{16 \text{ cm}^3}}$$

* Also/make if mixed up Pt and K to give 16.1 : 10 ratio i.e. 6.2 cm³ of K.

Ice melting

Page 4

(g) 1 kg of ice has volume 1.087 litres. ✓

So there are 3.913 l of water in the bucket
and hence 3.913 kg of water. ✓

Heat 0.5 kg of ice + 0.5 kg of ^{ice} water up to T_{final} and
cool 3.913 kg of water from 15°C to T_{final} } energy conservation
idea/expressions ✓

$$\therefore 3.913 \times 4180 \times (15 - T_f) = 0.5 \times 3.34 \times 10^5 + 0.5 \times 4180 \times (T - 0)$$

✓ correct substitution.

$$3.913 \times 4180 \times 15 - 0.5 \times 3.34 \times 10^5 = (3.913 + 0.5) 4180 T$$

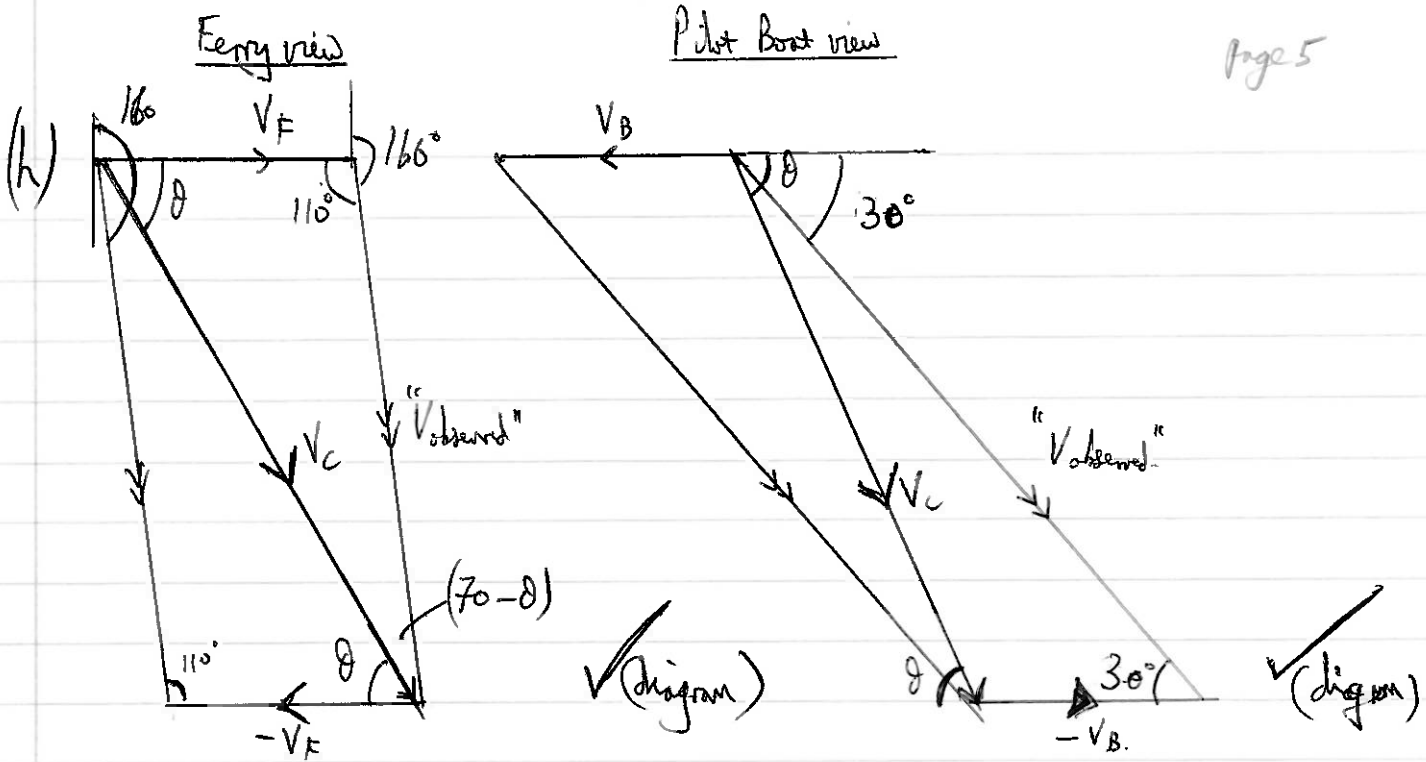
$$T = 4.25^\circ\text{C}$$

✓

$$= 4.3^\circ\text{C}$$

Not 4.8°C as they have melted out the ice-water warming (0.5 kg)
Mark 3 marks then. (5)
from 0 to T_{final}

(h) Ferry ad boat next page



Sine Rule

$$\frac{V_C}{\sin 110^\circ} = \frac{V_F}{\sin(70^\circ - \theta)}$$

$$\frac{V_C}{\sin 30^\circ} = \frac{V_B}{\sin(\theta - 30^\circ)}$$

Dividing to eliminate V_C , (procedure)

$$\frac{\sin 30^\circ}{\sin 110^\circ} = \frac{\sin(\theta - 30^\circ)}{\sin(70^\circ - \theta)} \cdot \frac{V_F}{V_B}$$

$$\frac{5}{7.5} \frac{\sin 110^\circ \times \sin(\theta - 30^\circ)}{\sin 30^\circ} = \sin(70^\circ - \theta)$$

$$1.253 (\sin \theta \cos 30^\circ - \sin 30^\circ \cos \theta) = \sin 70^\circ \cos \theta - \cos 70^\circ \sin \theta$$

$$1.427 \sin \theta = 1.566 \cos \theta$$

$$\tan \theta = 1.097$$

$$\theta = 47.7^\circ$$

Bearing is 138°

$$\left[\tan \theta = \frac{5}{(2\sqrt{3} + 3 \tan 20^\circ)} \right]$$

$$V_C = \frac{0.5 \times 7.5}{\sin(\theta - 30^\circ)} = 12.36 = \underline{\underline{12.4 \text{ m/s}}}$$

(7)

Car accelerating.

(i)

$$F \cdot v = P \quad \checkmark$$

so $Ma v = P$
 and $m_x v \cdot \frac{dv}{dx} v = P$

Zeromarks after this point if they use eyes for constant acceleration.
 $\left[a = v \frac{dv}{dx} \right]$

so $m v^2 dv = P dx$

Integrating $\frac{m v^3}{3} = P x + c$

At $x=0, v=0 \therefore c=0.$

constant of integration is zero specifically evaluated at $x=0, v=0$

So $v = \left(\frac{3 P x}{m} \right)^{\frac{1}{3}} \quad \checkmark$

(4)

or $F \cdot v = \frac{d}{dt} \left(\frac{1}{2} m v^2 \right)$

and $ma \frac{dx}{dt} = \frac{d}{dt} \left(\frac{1}{2} m v^2 \right) = \frac{1}{2} m 2 v \frac{dv}{dt}$

$\therefore a \frac{dx}{dt} = v \frac{dv}{dt}$

and $a = v \frac{dv}{dx}$

etc. as above.

In terms of t

$F t = P t$

$\frac{1}{2} m v^2 = P t$

$t = \frac{m v^2}{2 P}, v = \sqrt{\frac{2 P t}{m}} \quad \checkmark$

$\frac{dx}{dt} = \sqrt{\frac{2 P t}{m}} \quad \checkmark$

$\int_0^x dx = \sqrt{\frac{2 P}{m}} \int_0^t t^{\frac{1}{2}} dt$

$x = \sqrt{\frac{2 P}{m}} \frac{2}{3} t^{\frac{3}{2}}$

hence $x = \sqrt{\frac{8 P t^3}{9 m}} = \sqrt{\frac{8 P}{9 m} \cdot \frac{m^3 v^6}{8 P^3}} = \frac{m v^3}{3 P}$

$\therefore v = \left(\frac{3 P x}{m} \right)^{\frac{1}{3}} \quad \checkmark$

(4)

By dimensions.

$v = P^{\alpha} x^{\beta} m^{\gamma}$

$L T^{-1} = [M L^2 T^{-3}]^{\alpha} L^{\beta} M^{\gamma}$
 square powers.

L: $1 = 2\alpha + \beta$

M: $0 = \alpha + \gamma$


T: $-1 = -3\alpha$

$\alpha = \frac{1}{3}, \beta = \frac{1}{3}, \gamma = -\frac{1}{3}$

$v = \left(\frac{P x}{m} \right)^{\frac{1}{3}}$ But no marks as we want the constant k.

Submerged ball.

(g)



Net force upwards = buoyancy force - weight

$$Ma = \rho_w \cdot V \cdot g - mg$$

$$a = \rho_w \frac{V \cdot g}{m} - g$$

Statement about forces. ✓

a is constant, so eqns. of motion apply (implied) ✓

At depth d, $v^2 = 0^2 + 2 \left(\frac{\rho_w \cdot V \cdot g}{m} - g \right) \cdot d$ ✓

" $v^2 = 2gh$ " at surface. ✓

$$\therefore 2gh = 2g \left(\rho_w \frac{V}{m} - 1 \right) d$$

$$\frac{h}{d} = \left(\rho_w \frac{V}{m} - 1 \right)$$

$$\frac{h}{d} = \left(\frac{4}{3} \pi \frac{r^3 \rho}{m} - 1 \right)$$
 ✓

• Lose 1 mark if $\left(1 - \frac{4}{3} \pi \frac{r^3 \rho}{m} \right)$ i.e. wrong sign. (5)

Egg Timer

$$(k) \quad \frac{dm}{dt} = k \rho \cdot A \cdot g$$

$$[MT^{-1}] = [ML^{-3}]^\alpha \cdot [L^2]^\beta \cdot [LT^{-2}]^\gamma \quad \left. \begin{array}{l} \text{dimensional} \\ \text{or unit equation.} \end{array} \right\} \checkmark$$

$$\text{or } kg s^{-1} = (kg m^{-3})^\alpha \cdot (m^2)^\beta \cdot (m s^{-2})^\gamma$$

equating powers

kg

$$1 = \alpha$$

$$\Rightarrow \alpha = 1$$

$$-1 = -2\gamma$$

$$\Rightarrow \gamma = \frac{1}{2} \checkmark$$

m

$$0 = -3\alpha + 2\beta + \gamma$$

$$\Rightarrow \beta = \frac{5}{4}$$

$$\frac{dm}{dt} = k \rho A^{\frac{5}{4}} \cdot g^{\frac{1}{2}}$$

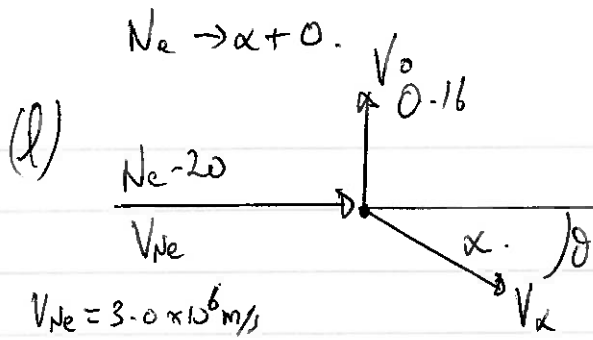
✓ for α and β .
(1 mark for γ).

$$\frac{\Delta m}{\Delta t_m} \bigg/ \frac{\Delta m}{\Delta t_E} = \sqrt{\frac{g_m}{g_E}}$$

$$\begin{aligned} \Delta t_m &= \Delta t_E \sqrt{\frac{g_E}{g_m}} \\ &= \sqrt{\frac{9.8}{1.6}} \times 15 \\ &= \underline{37.1 \text{ minutes}} \end{aligned} \quad \checkmark$$

Even if they obtain this result, they need the other parts to be correct in this question.

(4)



Cons of mom along line of flight $20 \mu \times V_{Ne} = 4 \mu \cdot V_\alpha \cos \theta$ (1) ✓
 " " \perp line of flight $16 \mu V_0 = 4 \mu V_\alpha \sin \theta$ (2) ✓

Square and add $400 V_{Ne}^2 + 256 V_0^2 = 16 V_\alpha^2$ (3) ✓

Cons of energy: $\frac{1}{2} \cdot 20 \mu \cdot V_{Ne}^2 + E_0 = \frac{1}{2} \cdot 4 \mu \cdot V_\alpha^2 + \frac{1}{2} \cdot 16 \mu \cdot V_0^2$ (4) ✓

Substituting values.

In (3) $3.6 \times 10^{15} + 16^2 V_0^2 = 16 V_\alpha^2$ (5)

In (4) $\frac{1}{2} \cdot 20 \mu \cdot (3 \times 10^6)^2 + 62.5 \times 10^6 \times 1.6 \times 10^{-19} = \frac{1}{2} \cdot 4 \mu V_\alpha^2 + \frac{1}{2} \cdot 16 \mu V_0^2$

(x2) So, $20 \mu (9 \times 10^{12}) + 2 \times 10^{-12} = 4 \mu V_\alpha^2 + (V_\alpha^2 - \frac{3.6 \times 10^{15}}{16}) \mu$
 and substituting (5) $\div 16$
 $(\div \mu)$ then $180 \times 10^{12} + \frac{2 \times 10^{-12}}{\mu} = 5 V_\alpha^2 - \frac{3.6 \times 10^{15}}{16}$

$(180 + 225) \times 10^{12} + \frac{2 \times 10^{-12}}{1.66 \times 10^{-27}} = 5 V_\alpha^2$

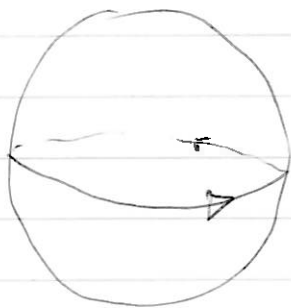
$(405 + 1205) \times 10^{12} = 5 V_\alpha^2$

$1610 \times 10^{12} = 5 V_\alpha^2$

$V_\alpha = 1.79 \times 10^7$ ✓

$V_\alpha = 1.8 \times 10^7 \text{ m/s}$ (5)

(m)



$$V_E = \frac{2\pi r}{T}$$

$$= \frac{2\pi \times 6.37 \times 10^6}{24 \times 3600}$$

$$= \underline{463 \text{ m/s}}$$

✓ speed of rotation.

$$W_1 = mg - \frac{m(463 - 250)^2}{r}$$

✓ subtract speeds at $\frac{V^2}{r}$

$$W_2 = mg - \frac{m(463 + 250)^2}{r}$$

✓ add speeds at $\frac{V^2}{r}$

$$W_1 - W_2 = \frac{m}{r} \left[(463 + 250)^2 - (463 - 250)^2 \right]$$

or $W_2 - W_1 = \frac{m}{r} \left[(V_E + V_p)^2 - (V_E - V_p)^2 \right]$

$$= \frac{m}{r} [4V_E \cdot V_p]$$

$$= \frac{6.37 \times 10^6}{6.37 \times 10^6} [4 \times 36 \times 250]$$

$$= \underline{0.073 \text{ N}}$$

$$= \frac{1}{6.37 \times 10^6} [713^2 - 213^2]$$

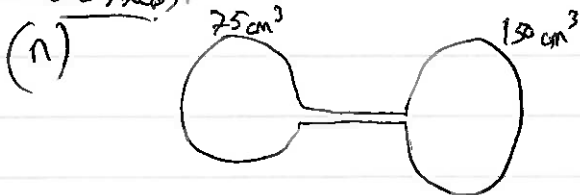
$$= \frac{926 \times 500}{6.37 \times 10^6}$$

$$= 0.0727 \text{ N}$$

$$= \underline{0.073 \text{ N}}$$

✓ full marks for the answer with my working.
5

Glass bulbs:



Quantity of gas (n moles) is fixed ✓ kiba

$$\therefore n = \frac{P_1 V_1}{RT_1} + \frac{P_2 V_2}{RT_2} = \frac{P}{RT} (V_1 + V_2)$$

$$= \frac{0.91 \times 10^5 (225 \times 10^{-6})}{8.31 \times 261}$$

$$= \underline{9.44 \times 10^{-3} \text{ moles}}$$

✓ values in kelvin

✓ result

then $n = \frac{P}{R} \left(\frac{V_1}{T_1} + \frac{V_2}{T_2} \right) = \frac{P_{\text{atm}}}{8.31} \left(\frac{75 \times 10^{-6}}{297} + \frac{150 \times 10^{-6}}{261} \right)$

$$= \frac{P_{\text{atm}} \times 10^{-6}}{8.31} (75 + 150)$$

✓ values AND in kelvin

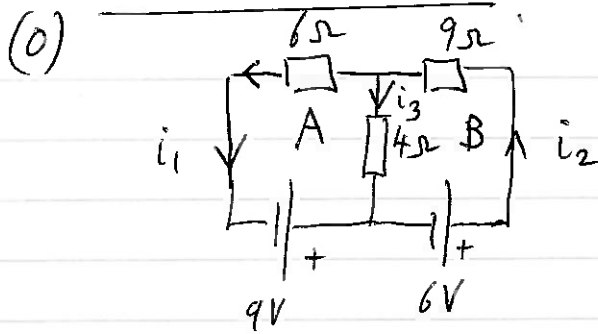
$$P_{\text{atm}} = 94832 \text{ Pa}$$

$$= \underline{95000 \text{ Pa}}$$

✓ result.

5

Current in $6\ \Omega$ resistor.



currents with directions marked ✓

KVL Loop A: $9 = -4i_3 + 6i_1$ (1) ✓

Loop B: $6 = 9i_2 + 4i_3$ (2) ✓

KCL $i_2 = i_1 + i_3$ (3) ✓

[consistent with diagram.]

substitute for i_1 in (1) $9 = 6i_2 - 6i_3 - 4i_3$
 $9 = 6i_2 - 10i_3$

$\times \frac{3}{2} \rightarrow \frac{3 \cdot 9}{2} = 9i_2 - 15i_3$

subtract (2) $\rightarrow \frac{3 \cdot 9}{2} - 6 = -15i_3 - 4i_3$
 $7.5 = -19i_3$

$i_3 = -\frac{7.5}{19} = -0.395\text{ A}$

So $9 = 6i_1 - 4i_3$

$i_1 = \frac{4 \cdot 7.5}{38} = 1.24\text{ A}$ flowing to the left. ✓

(direction must be clear from arrows only) ✓

(p) Photoelectric effect.



$E_\gamma = hc = 1.326 \times 10^{-18}\text{ J}$
 $\lambda = 8.2875\text{ eV}$ ✓

Max KE of emitted electrons is $8.2875 - 4.5\text{ eV} = 3.7875\text{ eV}$ ✓

So $V_{\text{max}} = 3.7875\text{ V} = 3.8\text{ V}$ ✓

$V_{\text{max}} = \frac{1}{4\pi\epsilon_0} \cdot \frac{Q}{r}$

$\therefore Q = 4\pi\epsilon_0 r \cdot V_{\text{max}} = 8.42 \times 10^{-13}\text{ C}$

$= 5.3 \times 10^6$ electrons. ✓

(4)

(9)

Three conducting spheres

$$\frac{1}{3}R \text{ (1)} \quad \frac{1}{2}R \text{ (2)} \quad R \text{ (3)}$$

$$k = \frac{1}{4\pi\epsilon_0}$$

$$V = k \frac{Q}{r}$$

$$Q = \frac{rV}{k}$$

$$Q_{\text{total}} = Q_1 + Q_3$$

$$= \frac{1}{3} \frac{RV}{k} + \frac{RV}{k}$$

$$Q_t = \frac{4}{3} \frac{RV}{k}$$

Then 3 spheres are connected and reach potential V'

$$\text{So } Q_t = \frac{1}{3} \frac{RV'}{k} + \frac{1}{2} \frac{RV'}{k} + \frac{RV'}{k}$$

$$= \frac{RV'}{k} \left(\frac{1}{3} + \frac{1}{2} + 1 \right)$$

$$= \frac{RV'}{k} \cdot \frac{11}{6}$$

$$\therefore \frac{4}{3} \frac{RV}{k} = \frac{11}{6} \frac{RV'}{k} \Rightarrow V' = \frac{8V}{11}$$


(Full marks for this result)

$$\text{Hence } \frac{Q_2}{Q_{\text{total}}} = \frac{\frac{1}{2} \frac{RV'}{k}}{\frac{4}{3} \frac{RV}{k}}$$

$$= \frac{\frac{1}{2} \cdot \frac{8V}{11}}{\frac{4}{3} \cdot \frac{RV}{k}} = \frac{8 \cdot 3}{2 \cdot 11 \cdot 4}$$

$$= \frac{3}{11}$$

(5)



$$k_1 A \frac{\Delta\theta_1}{l} = k_2 A \frac{\Delta\theta_2}{l} = k_3 A \frac{\Delta\theta_3}{l} \quad \left. \begin{array}{l} \\ \end{array} \right\} \checkmark \text{ either form}$$

So $k_1 \Delta\theta_1 = k_2 \Delta\theta_2 = k_3 \Delta\theta_3$

$$\text{and } \Delta\theta_1 + \Delta\theta_2 + \Delta\theta_3 = 100 \quad \checkmark$$

Now we can write $\Delta\theta_1 = \frac{k_2}{k_1} \Delta\theta_2$

and $\Delta\theta_2 = \frac{k_3}{k_2} \Delta\theta_3$

Hence $\Delta\theta_1 = \frac{k_2}{k_1} \cdot \frac{k_3}{k_2} \Delta\theta_3$

So that $\left(\frac{k_3}{k_1} + \frac{k_3}{k_2} + 1 \right) \Delta\theta_3 = 100 \quad \checkmark \text{ or equivalent step}$

Thus $\left(\frac{240}{60} + \frac{240}{400} + 1 \right) \Delta\theta_3 = 100$

$$\Delta\theta_3 = \frac{100}{5.6} = 17.86^\circ\text{C}$$

$$\Delta\theta_1 = \frac{k_3}{k_1} \Delta\theta_3 = 4 \Delta\theta_3 = 71.43^\circ\text{C}$$

$$\Delta\theta_2 = \frac{k_3}{k_2} \Delta\theta_3 = \frac{240}{400} \Delta\theta_3 = 10.7^\circ\text{C}$$

\therefore Cu/Al junction is 17.9°C \checkmark

Fe/Cu junction is 17.86 + 10.7 = 28.6°C \checkmark

(5)

bicycle pump

(S)



displacement node + antinode -

$\frac{\lambda}{4}$ fundamental note in tube (ignore end effect)

$$\therefore \frac{\lambda}{4} = \frac{330}{4 \times 512} = \underline{0.161 \text{ m}}$$

Boyle's law

$$P_1 V_1 = P_2 V_2$$

$$10^5 \times 25 \text{ cm} = P_2 \times 16.1 \text{ cm}$$

$$\underline{P_2 = 1.55 \times 10^5 \text{ Pa}}$$

$$\therefore F = (P_{\text{inside}} - P_{\text{at}}) \times \text{area} \quad \checkmark (P_{\text{in}} - P_{\text{at}})$$

$$= (1.55 - 1.0) \times 10^5 \times A$$

$$\underline{F = 5.5 \times 10^4 \text{ A newtons.}} \quad \checkmark$$

(t)

cooling

$$\frac{d\theta}{dt} = -k(\theta - \theta_0) \quad \checkmark \rightarrow \frac{\Delta\theta}{\Delta t} = k(\theta - \theta_0) \quad \checkmark (\text{need } \theta - \theta_0) \quad \checkmark$$

integrate $\ln(\theta - \theta_0) \Big|_{\theta_i}^{\theta_f} = -kt \Big|_0^t \quad \checkmark$

$$\frac{0.5}{1} = k(9.95)$$

$$\text{So, } k = \frac{0.5}{9.95} \quad \checkmark$$

$$\ln \frac{(\theta_f - \theta_0)}{(\theta_i - \theta_0)} = -kt$$

$$\text{So } \ln \frac{(29.7 - 20)}{(30.2 - 20)} = -k \cdot 1$$

$$\frac{(24 - 23)}{t} = \frac{0.5}{9.95} (3.5) \quad \checkmark$$

$$\text{Hence } \ln \left(\frac{9.7}{10.2} \right) = -k$$

$$\Rightarrow \underline{t = 5.7 \text{ minutes}} \quad \checkmark$$

$$k = 0.0503 \quad \checkmark$$

$$\text{So } \ln \left(\frac{23 - 20}{24 - 20} \right) = -0.0503 t$$

$$\ln \frac{3}{4} = -0.0503 t$$

$$\underline{t = 5.7 \text{ minutes}} \quad \checkmark$$

(5)

Question 2

(a) $E = mgl$
 $P = \frac{mgl}{t}$ ✓

$$= 3380 \times 10^3 \times 9.81 \times 61 \quad \checkmark \text{ (correct values)}$$

$$= 2.02 \times 10^9 \text{ W} \quad \checkmark \quad (3)$$

or $P = \rho gh$, $F = \rho Agl$
 $P = \frac{F \cdot v}{t}$
 $= \rho A v g l$
 $= 3380 \times 10^3 \times 9.81 \times 61$
 $= 2.02 \times 10^9 \text{ W}$

(b) To keep from blocking the outlet, the water must keep moving. ✓ (idea)

$$P_{\text{wanted}} = \frac{1}{2} \frac{m v^2}{t}$$

$$= \frac{1}{2} 3380 \times 10^3 \times 8^2$$

$$= 0.108 \times 10^9 \text{ W} = \underline{\underline{0.11 \times 10^9 \text{ W}}} \quad \checkmark$$

$$\eta = 1 - \frac{0.108}{2.023} = 1 - 0.0535$$

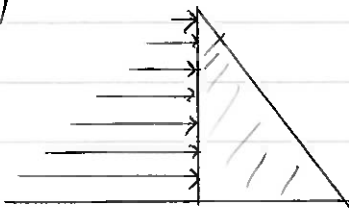
$$= 94.7\%$$

$$= 95\% \quad \checkmark$$

(Not 5%)

(3)

(c) (i)



$$\text{Resultant force} = \int_0^h P(x) \cdot w \cdot dx$$

$$= \rho g w \int_0^h x dx$$


$$= \rho g w \frac{h^2}{2} \quad \checkmark \quad \text{equiv.} \quad (1)$$

or P varies linearly with depth. \Rightarrow average pressure $= \frac{\rho g h}{2}$.

$$\text{resultant force} = \frac{\rho g h}{2} \cdot (hw)$$

$$= \underline{\underline{\rho g w \frac{h^2}{2}}}$$

(ii)



$$\begin{aligned}
 \text{Total moment} &= \sum x c \cdot \delta F \\
 &= \sum (P \cdot W \delta x) x c \quad (\text{Moment about } F) \quad \checkmark \\
 &= \int_0^h \rho g (h-x) \cdot dx \cdot W \cdot x \\
 &= \rho g W \int_0^h (h-x) x \cdot dx \\
 &= \rho g W \left[h \frac{x^2}{2} - \frac{x^3}{3} \right]_0^h \\
 &= \rho g W \left[\frac{h^3}{2} - \frac{h^3}{3} \right] \\
 &= \rho g W \frac{h^3}{6} \quad \text{about } F. \quad \checkmark
 \end{aligned}$$

Using the previous resultant force acting at H from F ,

$$H \cdot \rho g W \frac{h^2}{2} = \rho g W \frac{h^3}{6}$$

gives $H = \frac{h}{3}$ above F . \checkmark

(3)

Alternatively, from the top of the dam,

$$\begin{aligned}
 \text{Total moment} &= \int_0^h \rho g x \cdot dx \cdot W \cdot x \\
 &= \rho g W \frac{x^3}{3} \Big|_0^h \\
 &= \rho g W \frac{h^3}{3}.
 \end{aligned}$$

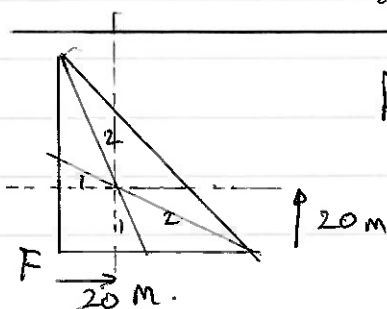
Using resultant force acting at a point H' below the top of the dam,

$$\rho g W \frac{h^3}{3} = \rho g W \frac{h^2}{2} \cdot H'$$

So $H' = \frac{2}{3} h$ below the top of the dam.

So $\frac{1}{3} h$ above F .

(iii)



By proportions, centre of mass is 20 m above F and 20 m to the right of F .

(1)

(iv) Moment about C due to water pressure:

This is the same as the moment about F. ✓

So, Moment about C is $\rho g W \frac{h^3}{6}$

$$= 1000 \times 9.81 \times 2700 \times \frac{60^3}{6}$$

$$= \underline{9.54 \times 10^{11} \text{ Nm}} \quad \checkmark$$

Mom. about C due to weight of dam is $\frac{1}{2} W \cdot t \cdot h \rho_{\text{concrete}} \times \frac{2}{3} t$

$$= \frac{1}{2} 2700 \times 60^2 \times 9.81 \times \rho_{\text{concrete}} \times 40 \quad \checkmark$$

$$= 1.91 \times 10^9 \rho_{\text{concrete}} \quad \textcircled{3}$$

(vi)

$$\therefore \rho_{\text{concrete}} = \frac{9.54 \times 10^{11}}{\frac{1}{2} 2700 \times 60^2 \times 9.81 \times 40}$$

$$= \underline{500 \frac{\text{kg}}{\text{m}^3}} \quad \checkmark$$

in symbols

$$\text{ie. } \rho g W \frac{h^3}{6} = \frac{1}{2} W t h \rho_{\text{concrete}} \cdot \frac{2}{3} t$$

$$\rho \frac{h^2}{6} \cdot \frac{3}{t^2} = \rho_{\text{concrete}}$$

$$t = h \quad \text{so } \rho_{\text{concrete}} = \frac{1}{2} \rho_{\text{water}} = 500 \frac{\text{kg}}{\text{m}^3}$$

(v)

$$\mu \cdot \frac{1}{2} W t h \rho_{\text{concrete}} = \rho g W \frac{h^2}{2}$$

$$\mu t \rho_{\text{concrete}} = \rho h$$

$$\rho_{\text{concrete}} = \frac{\rho h}{\mu t} = \frac{1000 \times 60}{0.75 \times 60}$$


$$= \underline{1300 \frac{\text{kg}}{\text{m}^3}} \quad \checkmark \quad \textcircled{2}$$

(10)

(d) (i) Energy flow into boundary = energy flow out of boundary

✓ idea, diagram, statement.

$$\omega^2 z_1 A_i^2 = \omega^2 z_1 A_r^2 + \omega^2 z_2 A_t^2$$



$$z_1 (A_i^2 - A_r^2) = z_2 A_t^2$$

(ii)
$$z_1 (A_i^2 - A_r^2)(A_i + A_r) = z_2 A_t^2$$

Divide by eqn. 1 squared
$$\frac{(A_i + A_r)^2}{A_t^2} = \frac{z_2}{z_1}$$

✓ for derivation (difference of squares, use of 2nd equation etc.)

then
$$z_1 \frac{(A_i - A_r)}{(A_i + A_r)} = z_2$$

$$z_1 \left(\frac{1 - \frac{A_r}{A_i}}{1 + \frac{A_r}{A_i}} \right) = z_2$$

$$z_1 - z_1 \frac{A_r}{A_i} = z_2 + z_2 \frac{A_r}{A_i}$$

$$\frac{A_r}{A_i} = \frac{(z_1 - z_2)}{(z_1 + z_2)}$$

No marks for answer.

(iii)

$$\frac{A_t}{A_i} = 1 + \frac{A_r}{A_i}$$

$$= \frac{z_1 + z_2 + z_1 - z_2}{(z_1 + z_2)}$$

$$= \frac{2z_1}{(z_1 + z_2)}$$

✓

(iv) If $z_1 = z_2$, there is no identifiable boundary, so $A_r = 0$ and $A_t = A_i \Rightarrow \frac{A_r}{A_i} = 0$ AND $\frac{A_t}{A_i} = 1$ ✓

(v) $z_2 > z_1$ $\frac{A_r}{A_i}$ has a negative value corresponding to a phase change on reflection. ✓

$$(vi) R = \left(\frac{A_r}{A_i}\right)^2 = \frac{(z_1 - z_2)^2}{(z_1 + z_2)^2}$$

No mark for this
"show that"

$$T = \frac{z_2 A_i^2}{z_1 A_i^2} = \frac{z_2 \cdot 4 \cdot z_1^2}{z_1 (z_1 + z_2)^2}$$

$$= \frac{4 z_1 z_2}{(z_1 + z_2)^2}$$

$$(vii) \text{ And } R+T = \frac{(z_1 - z_2)^2 + 4 z_1 z_2}{(z_1 + z_2)^2}$$

$$= \frac{(z_1 + z_2)^2}{(z_1 + z_2)^2}$$

$$= \underline{1}$$

$$(viii) R_{(i)} = \frac{(2400 \times 3700 - 1.2 \times 330)^2}{(2400 \times 3700 + 1.2 \times 330)^2}$$

Conc. air
A_i →
← A_r

$$= 0.9998$$

$$= 100\%$$

Conc. water

$$R_{(ii)} = \frac{(2400 \times 3700 - 1000 \times 1480)^2}{(2400 \times 3700 + 1000 \times 1480)^2}$$

$$= 0.51$$

$$= \underline{51\%}$$

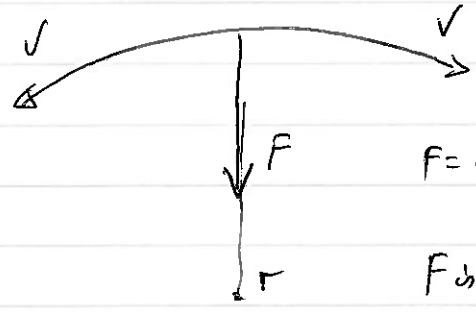
(4)

(9)

25

Question 3

(a) The velocity is constantly changing but by NIT this means a force is acting.
or direction of motion Not just direction


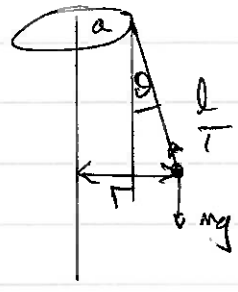


$$F = \frac{mv^2}{r} = m\omega^2 r$$

F is towards the centre of the circular path.

(2)

(b)



$$T \sin \theta = \frac{mv^2}{r} = m\omega^2 r$$

$$= \frac{mv^2}{(a+l \sin \theta)} = m\omega^2 (a+l \sin \theta) \checkmark$$

and $T \cos \theta = mg$

$$\omega^2 \frac{v^2}{g(a+l \sin \theta)} = \frac{\omega^2 (a+l \sin \theta)}{g}$$

$$\omega^2 = \frac{g \tan \theta}{(a+l \sin \theta)}$$

substituting.

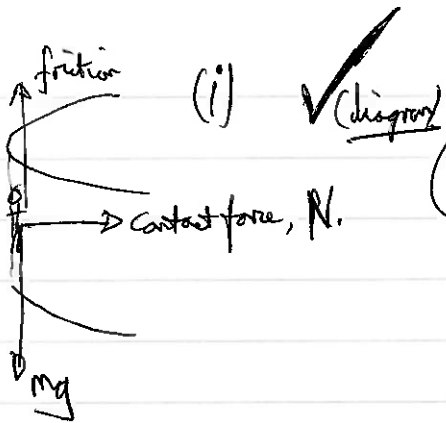
$$\omega^2 = \frac{9.81 \times \frac{1}{\sqrt{3}}}{(6 + 4 \times 0.5)}$$

$$\omega = \underline{\underline{0.84 \text{ rad/s.}}}$$

✓ either or.

(2)

(c)



(i) ✓ Diagram

(ii) $N = m r \omega^2$

Resolve V: $f = mg$

So $\mu N = mg$

$\mu m r \omega^2 = mg$ ✓

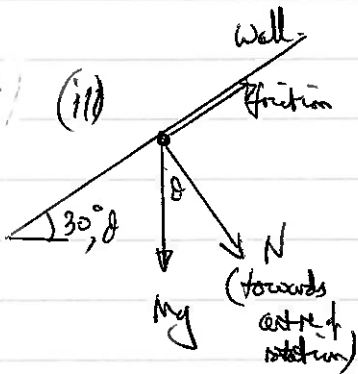
$\omega^2 = \frac{g}{\mu r}$

$\omega = \sqrt{\frac{9.81}{0.4 \times 5}}$

$\omega = 2.215$

$\omega = 2.2 \text{ rad/s}$ ✓

③



(ii)

✓ Diagram

(iv) Resolve parallel to wall, $mg \cos \theta = f$ ①

Perpendicular to wall $mg \sin \theta + N = m r \omega^2$ ✓

and $f = 0.4 N$

∴ from ① $0.4 N = mg \cos \theta$

$N = 2.5 mg \cos \theta$

Hence ② $mg \sin \theta + 2.5 mg \cos \theta = m r \omega^2$

$g \frac{\sqrt{3}}{2} + 2.5 g \frac{1}{2} = r \omega^2$

$2.12g = r \omega^2$

$\omega = 2.0 \text{ rad/s}$ [shown] ✓

$= 2.0 \text{ rad/s}$

Alternative using $\theta = 30^\circ$

Resolve parallel to wall -

$mg \sin \theta = f$ ③

⊥ to wall

$mg \cos \theta + N = m r \omega^2$ ④


$f = \mu N$ ⑤

for $mg \sin \theta = \mu N$ ③ and ⑤

Thus $mg \left(\cos \theta + \frac{1}{\mu} \sin \theta \right) = m r \omega^2$ from ④,

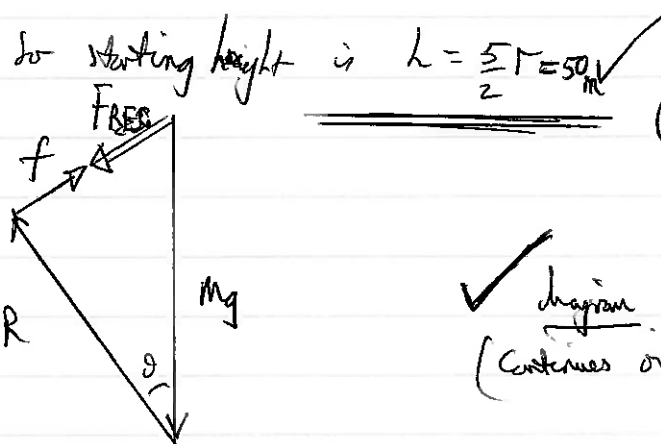
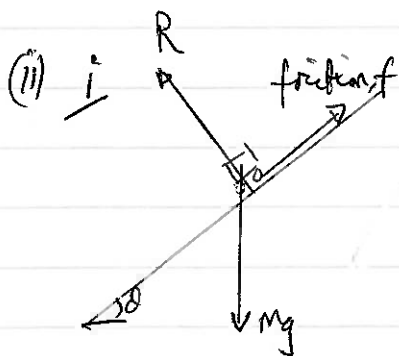
③

$$\begin{aligned} \omega^2 &= \frac{g}{r\mu} (\mu \cos \theta + \sin \theta) \\ &= \frac{9.81}{5 \times 0.4} \left(0.4 \frac{\sqrt{3}}{2} + \frac{1}{2} \right) \\ &= 4.15 \\ \omega &= 2.04 \text{ rad/s.} \\ &= \underline{2.0 \text{ rad/s.}} \end{aligned} \quad \theta = 30^\circ$$



To remain in contact at the top of the loop. $N + mg = \frac{mv^2}{r}$ ✓
 When $v = v_0$, minimum speed and $N = 0$
 $\therefore mg = \frac{mv_0^2}{r}$
 $\therefore \frac{1}{2} mv_0^2 = \frac{1}{2} mgr$

So energy at top of loop is $2mgr + \frac{1}{2} mgr$
 $= \frac{5}{2} mgr$



So starting height is $h = \frac{5}{2} r = 50 \text{ m}$ ✓ (2)

✓ diagram (contains overlap)

ii) $W.D \text{ by friction} = f \cdot l$
 $= \mu R \cdot l$
 $= \mu \cdot l \cdot mg \cos \theta$ ✓

Notation: final speed with friction, v_f
 " " without " , v_0

$$\therefore \frac{\frac{1}{2} M v_f^2}{\frac{1}{2} M v_0^2} = \frac{m g l (\sin \theta - \mu \cos \theta)}{m g l \sin \theta}$$

$$\frac{v_f^2}{v_0^2} = 1 - \mu \cot \theta$$

$$= 1 - 0.05 \cdot \frac{1}{\tan 40^\circ}$$

$$= 0.9604$$

$$\frac{v_f}{v_0} = 0.96975$$

✓ a result showing no 'm' dependence, only μ and θ (May not be this equation)

So, loss in speed = 0.03025
 $= 3.0\%$ ✓

(16)

(iii) There is a normal reaction force R , on the straight track
 As soon as the carriage starts on the curve, there is a centripetal force added, of $\frac{M v^2}{r}$

Using energy cons. $\frac{1}{2} M v_0^2 = m g l \sin \theta$
 $v_0^2 = 2 g l \sin \theta$ ✓

$$\therefore \frac{M v_0^2}{r} = \frac{m \cdot 2 g l \sin \theta}{\frac{l}{2}}$$

$$= 4 M g \sin \theta$$

$$= 4 \times 60 \times 9.81 \times \sin 40^\circ$$

$$= 1513 \text{ N}$$

$$= \underline{\underline{1500 \text{ N}}}$$
 ✓

(2)
(8)

(e) (i) Both bars fall through height h when A hits the ground.
 So $\frac{1}{2}mv^2 = mgh \Rightarrow v = \sqrt{2gh}$ ✓

(ii) B compresses the spring by (not for) an amount x_m
 So loss of gpe is $mgh + mgx_m$.
 So for B, $(\frac{1}{2}mv^2) = mg(h + x_m) = E$ ✓

The loss of gpe is stored in the two springs.
 $\therefore mg(h + x_m) = 2 \times \frac{1}{2}kx_m^2$

(iii) B starts to rise again and will stretch the springs by x_e when A starts to leave the ground.
 So $kx_e = \frac{1}{2}Mg$ for a spring. ✓ note factor of $\frac{1}{2}$.

(iv) Energy in the springs is $2 \times \frac{1}{2}kx_e^2$ ✓
 whilst B has risen by $(x_e + x_m)$ from its lowest point

\therefore Emin to lift A is gpe gained by B + pe in springs ✓
 $E_{min} = kx_e^2 + Mg(x_e + x_m)$ ✓
 and this came from the compression of the springs by B. ($2 \times \frac{1}{2}kx_m^2$)

$$\therefore kx_e^2 + Mg(x_e + x_m) = (mgh + mgx_m)$$

(initial energy of B)

thus $kx_e^2 + mgx_e = mgh$ ✓
 But we know already that $kx_e = \frac{Mg}{2}$


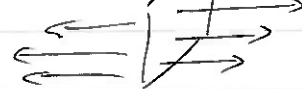
Hence $k\left(\frac{Mg}{2k}\right)^2 + Mg \cdot \frac{Mg}{2k} = mgh$

$$\frac{Mg}{4k} + \frac{Mg}{2k} = L$$

$$h = \frac{3Mg}{4k}$$

(7) ✓

Question 4

(a) (i)  on the surface (on both faces). ✓
 (ii)  ✓ (field lines to left AND right)

(iii) The denser the field lines the stronger E. ✓
 (or closer together)

(iv) $F = q E_s$ ✓

(4)

(b) (i) i $\sigma = \frac{Q}{4\pi r^2}$
 $E = \frac{1}{4\pi \epsilon_0} \frac{Q}{r^2}$ } both. ✓

ii) Hence $E = \frac{\sigma}{\epsilon_0}$ ✓
 and E does not depend upon r.

iii) Half the field emerges on one face and half on the other ✓
 $\therefore E = \frac{1}{2} \frac{\sigma}{\epsilon_0}$

(ii) i) $E_s = \frac{E_{sphere}}{2}$ ✓

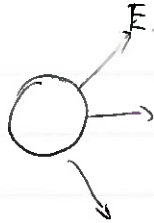
ii) The field strength in the hole would be cancelled by the $\frac{E_{sphere}}{2}$ of E_s .
 \therefore field through hole is $\frac{E_{sphere}}{2}$. ✓

iii) Force on SA is field strength \times charge
 $\frac{E_{sphere}}{2} \times \delta q$
 $= \frac{1}{2} \cdot \frac{1}{4\pi \epsilon_0} \frac{Q}{r^2} \times \sigma \delta A$ ✓

iv) Pressure on surface is $\frac{F}{\delta A} = \frac{1}{2} \frac{1}{\epsilon_0} \cdot \frac{Q}{4\pi r^2} \cdot \sigma$
 $= \frac{\sigma^2}{2\epsilon_0}$ ✓

(7)

(c) (i)



$$V_{\text{sphere}} = \frac{1}{4\pi\epsilon_0} \cdot \frac{Q}{r}$$

$$E_{\text{sphere}} = \frac{1}{4\pi\epsilon_0} \cdot \frac{Q}{r^2}$$

$$= \frac{V_{\text{sphere}}}{r}$$

$$\therefore r = \frac{V_{\text{sphere}}}{E_{\text{sphere}}} = \frac{7000}{3 \times 10^6}$$

$$= \underline{2.3 \text{ mm}}$$

(ii)

$$Q = V_{\text{sphere}} \times 4\pi\epsilon_0 \times r$$

$$= 1.82 \times 10^{-9} \text{ C}$$

$$= \underline{1.8 \text{ nC}}$$

$$\sigma = \epsilon_0 E$$

$$= 8.85 \times 10^{-12} \times 3 \times 10^6$$

$$= \underline{2.7 \times 10^{-5} \text{ C m}^{-2}} \quad (2.655 \text{ C/m}^2)$$

(iii)

Energy: $mgh + qV = \frac{1}{2}mv^2$

$$2gh + \frac{2q}{m} \cdot V = v^2$$

$$2gh + \frac{2qV}{\frac{4}{3}\pi r^3 \rho} = v^2$$

ecf allowed for r and Q from above

$$2 \times 9.81 \times 0.1 + \frac{2 \times 1.8 \times 10^{-9} \times 7000}{\frac{4}{3} \cdot \pi (2.33 \times 10^{-3})^3 \times 10^3} = v^2$$

(only 1 mark allowed)

$$v = 1.56$$

$$= \underline{1.6 \text{ m/s}}$$

$v = 0.692 \text{ m/s}$ if mgh left out

(iv)

$$I = \frac{Q}{t} = \frac{Nq}{t} = \left(\frac{64 \times 10^{-6}}{3600} \right) \div \left(\frac{4}{3} \pi (2.33 \times 10^{-3})^3 \times (1.8 \times 10^{-9}) \right)$$

$$= 6.03 \times 10^{-10} \text{ A}$$

$$= \underline{6.0 \times 10^{-10} \text{ A}}$$

(7)

(d)

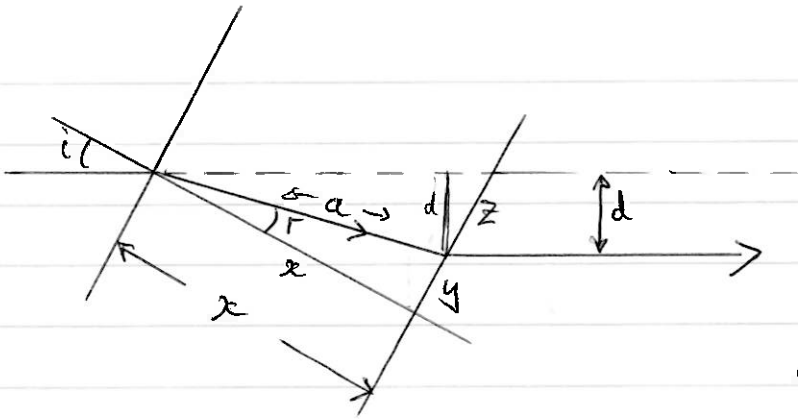


diagram ✓

$$n = \frac{\sin i}{\sin r}$$

$$\frac{x}{a} = \cos r$$

$$\frac{d}{a} = \sin(i-r)$$

$$\text{Hence } d = a \sin(i-r) \approx a(i-r)$$

$$a = \frac{x}{\cos r} \approx x$$

$$r = \frac{i}{n} \quad \checkmark$$

$$\text{So } d = x \left(i - \frac{i}{n} \right) = \frac{xi}{n} (n-1) \quad \checkmark$$

$$\frac{dd}{dt} = \frac{di}{dt} \cdot \frac{x}{n} (n-1) \quad \checkmark$$

$$= 2\pi f \cdot \frac{x}{n} (n-1) \quad \checkmark$$

$$= 2\pi \cdot 200 \times 5 \times 10^{-2} \left(\frac{0.5}{1.5} \right)$$

$$= \pi \frac{2}{3} \cdot 10$$

$$= \frac{20\pi}{3} = \underline{\underline{21 \text{ ms}^{-1}}} \quad \checkmark$$

(7)

Understandable working ✓

Question 5

(a) If it has a speed greater than the escape velocity, it is not a capture object. (Comment)

$$\frac{1}{2} M v_e^2 = \frac{G M_s M}{r}$$

$$v_e^2 = \frac{2 \times 6.67 \times 10^{-11} \times 1.99 \times 10^{30}}{38.1 \times 10^9}$$


$$= \frac{6.67 \times 3.98 \times 10^{10}}{38.1}$$

$$v_e = 8.35 \times 10^4 \text{ m/s}$$

$$= 83.5 \frac{\text{km}}{\text{s}}$$

which is less than the speed of the object. \checkmark Comment required
So not bound to the Sun. (4)

(b) (i)



CM position given by $M_1 d_1 = M_2 d_2$ \checkmark

OR take moments about center of r_2 , say. $\frac{4}{3} \pi r_1^3 \rho d_1 = \frac{4}{3} \pi r_2^3 \rho d_2$

$$d_2 \left(\frac{4}{3} \pi r_1^3 \rho \right) = \frac{4}{3} \pi r_2^3 \rho (r_1 + r_2) \quad \text{So} \quad r_1^3 d_1 = r_2^3 d_2$$

$$\text{or} \quad d_1 = \left(\frac{r_2}{r_1} \right)^3 d_2$$

$$\text{Then } d_2 = \frac{r_2^3 (r_1 + r_2)}{(r_1^3 + r_2^3)}$$

But $d_1 + d_2 = r_1 + r_2$

$$\text{So } d_1 = \left(\frac{r_2}{r_1} \right)^3 (r_1 + r_2 - d_1)$$

$$\text{Hence } d_1 \left(1 + \left(\frac{r_2}{r_1} \right)^3 \right) = \left(\frac{r_2}{r_1} \right)^3 (r_1 + r_2)$$

$$\text{So } d_1 (r_1^3 + r_2^3) = r_2^3 (r_1 + r_2)$$

$$\text{and } d_1 = \frac{r_2^3 (r_1 + r_2)}{(r_1^3 + r_2^3)}$$

$$r_1 = 9750 \text{ m}$$

$$r_2 = 7100 \text{ m}$$

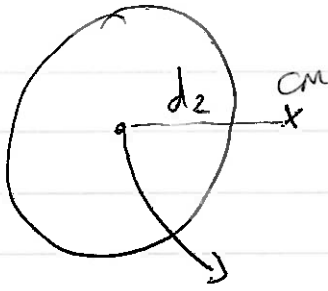
$$d_1 = 4694 \text{ m} = 4700 \text{ m}$$

$$= 4.7 \text{ km} \quad \checkmark$$

(2)

[OK if d_2 calculated instead. $d_2 = 12150 \text{ m} \quad \checkmark$]

(ii)



lobe 2 orbits about the CM and is attracted by lobe 1.
Centripetal force produced by gravity

$$M_2 d_2 \omega^2 = \frac{G M_1 M_2}{(\Gamma_1 + \Gamma_2)^2} \quad \checkmark$$

$$\begin{aligned} \therefore M_1 &= \frac{d_2 (\Gamma_1 + \Gamma_2)^2 \omega^2}{G} \\ &= \frac{d_2 (\Gamma_1 + \Gamma_2)^2 \cdot 4\pi^2}{T^2} \end{aligned}$$

$$\begin{aligned} \text{Now, } d_2 &= \Gamma_1 + \Gamma_2 - d_1 \\ &= 16850 - 4700 \\ &= \underline{12150 \text{ m.}} \quad \checkmark \end{aligned}$$

$$\begin{aligned} \therefore M_1 &= \frac{12150 \times 16850^2 \times 4\pi^2}{6.67 \times 10^{-11} \times (15 \times 3600)^2} \\ &= \underline{7.00 \times 10^{14} \text{ kg}} \quad \checkmark \end{aligned}$$

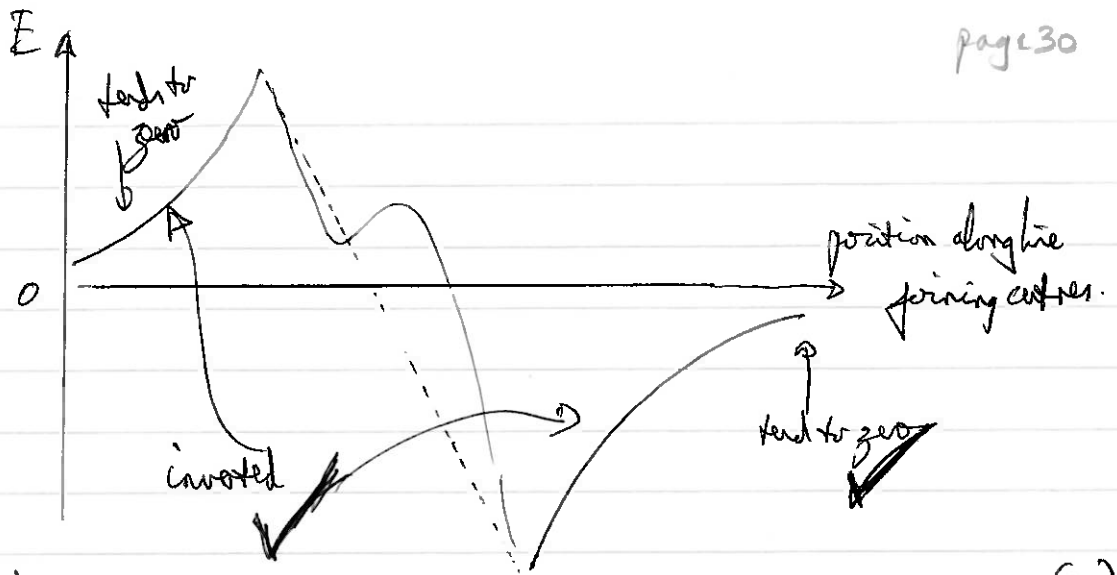
$$\begin{aligned} &= \frac{4}{3} \pi \Gamma_1^3 \rho. \\ \text{or } \rho &= \frac{7.00 \times 10^{14}}{9750^3} \cdot \frac{3}{4\pi} \\ &= \underline{180 \text{ kg m}^{-3}} \quad \checkmark \text{ [very low density for rocky material]} \quad (4) \end{aligned}$$

More directly, using $M_1 = d_2 \frac{(\Gamma_1 + \Gamma_2)^2 \omega^2}{G}$ with $d_2 = \Gamma_1 \frac{(\Gamma_1 + \Gamma_2)}{(\Gamma_1^3 + \Gamma_2^3)}$

$$\text{we have } \frac{4}{3} \pi \rho \cancel{\Gamma_1^3} = \cancel{\Gamma_1^3} \frac{(\Gamma_1 + \Gamma_2)^2 \cdot 4\pi^2}{(\Gamma_1^3 + \Gamma_2^3) T^2 G}$$

$$\begin{aligned} \rho &= \frac{(\Gamma_1 + \Gamma_2)^2}{(\Gamma_1^3 + \Gamma_2^3)} \cdot \frac{3\pi}{T^2 G} = \frac{3.724 \times 3\pi}{(15 \times 3600)^2 \times 6.67 \times 10^{-11}} \\ &= \underline{180 \text{ kg m}^{-3}} \end{aligned}$$

(iii)



(This graph can be upside down.)

(2)

$$(iv) \text{ Grav. pe. lost} = G M_1 M_2 \left(\frac{1}{(r_1 + r_2)} - \frac{1}{\infty} \right) \checkmark$$

$$= 6.67 \times 10^{-11} \times \frac{3.06 \times 10^{16} \times 1.18 \times 10^{16}}{16850}$$

$$= \underline{1.43 \times 10^{18} \text{ J}} \checkmark$$

(v) Cons. of mom. with CM stationary, \checkmark

$$m_1 v_1 = m_2 v_2 \checkmark$$

$$v_1 = \frac{m_2}{m_1} v_2$$

$$\therefore KE = \frac{1}{2} m_1 v_1^2 + \frac{1}{2} m_2 v_2^2$$

$$= \frac{1}{2} m_1 \frac{m_2^2}{m_1^2} v_2^2 + \frac{1}{2} m_2 v_2^2$$

$$= \frac{1}{2} m_2 v_2^2 \left(\frac{m_2}{m_1} + 1 \right) \checkmark$$

$$= \frac{m_2}{2m_1} (m_1 + m_2) v_2^2$$

$$= 1.43 \times 10^{18} \text{ J total energy} \checkmark$$

$$\text{Substituting, } v_2 = 13.2 \text{ m/s} = \underline{13 \text{ m/s}} \checkmark$$

$$v_1 = 5.1 \text{ m/s}$$

$$\underline{v_1 + v_2 = 18 \text{ m/s}} \checkmark$$

(7)

Do not allow adding $KE_1 + KE_2 = \frac{1}{2}(m_1 + m_2)v_2^2$ for v_1 .

(VI) No. of moles is $\frac{4.24 \times 10^{16} \times 10^3}{56}$ $\leftarrow g \rightarrow kg$ ✓
 $= 7.57 \times 10^{17}$ moles.
 $= 7.6 \times 10^{17}$ moles. ✓

$$E = M \int_4^T c dt$$

$$= M \frac{12\pi^4 R}{5 \times 10^3} \int_4^T T^3 dT$$

So, $1.43 \times 10^{18} = 7.57 \times 10^{17} \times \frac{12\pi^4 \times 8.31}{5 \times 464^3} \left[\frac{T^4}{4} - \frac{4^4}{4} \right]$ ✓ use of moles here.

$$\underline{T = 250k}$$

6

Question 6

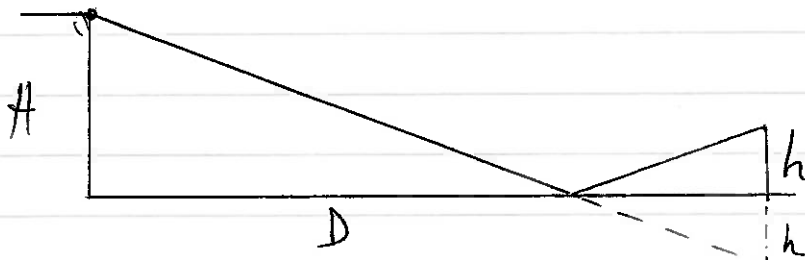
(a)

- Constant frequency [not same frequency]
- Same type of waves
- Same polarisation
- Coherent
- Waves crossing [do not accept same medium]

4 for 2 marks ✓
3 for 1 mark ✓

(2)

(b) (i)



path difference is $\sqrt{(H+h)^2 + D^2} - \sqrt{(H-h)^2 + D^2}$ ✓

$= D \left(1 + \left(\frac{H+h}{D} \right)^2 \right)^{\frac{1}{2}} - D \left(1 + \left(\frac{H-h}{D} \right)^2 \right)^{\frac{1}{2}}$ ✓ ↓ expansion

$\approx D \left(1 + \frac{1}{2} \left(\frac{H+h}{D} \right)^2 - 1 - \frac{1}{2} \left(\frac{H-h}{D} \right)^2 \right)$

$= \frac{D}{2} \left(\left(\frac{H+h}{D} \right)^2 - \left(\frac{H-h}{D} \right)^2 \right)$

$= \frac{D}{2D^2} (H^2 + h^2 + 2hH - H^2 - h^2 + 2hH)$

$= \frac{1}{2D} 4hH$

$= 2 \frac{hH}{D}$ ✓

And p.d. for a maximum when there is a phase change of π is $\frac{\lambda}{2}$ ✓

$\therefore \frac{\lambda}{2} = 2 \frac{hH}{D}$

$h = \frac{\lambda D}{4H}$

(no mark for the answer)

(4)

(ii) i

$$D = 1500 \text{ m}$$

$$h = 20 \text{ m}$$

$$H = 80 \text{ m}$$

$$f = 70 \times 10^6 \text{ Hz}$$

$$\therefore \lambda = 4.286 \text{ m}$$

For a minimum, $pd = \lambda$

$$\therefore \lambda = \frac{2hH}{D}$$

h, D constant

$$\therefore H' = \frac{\lambda D}{2h} = \frac{4.29 \times 1500}{2 \times 20}$$

$$= 161 \text{ m}$$

So the water level needs to fall by 81 m ✓

(ii) If H changes by 5 m;
then pd with $H = 80 \text{ m}$ is $\frac{2hH}{D} = \frac{2 \times 20 \times 80}{1500}$

$$= \frac{32}{15} = 2.13 \text{ m}$$

pd with $H = 85 \text{ m}$ is $\frac{2 \times 20 \times 85}{1500}$

$$= 2.27 \text{ m}$$

2.13 m pd is $\approx \frac{\lambda}{2}$ [for 70.3 MHz]

So a maximum, as 2.27 m is only 6% different,
so little change in signal strength. ✓

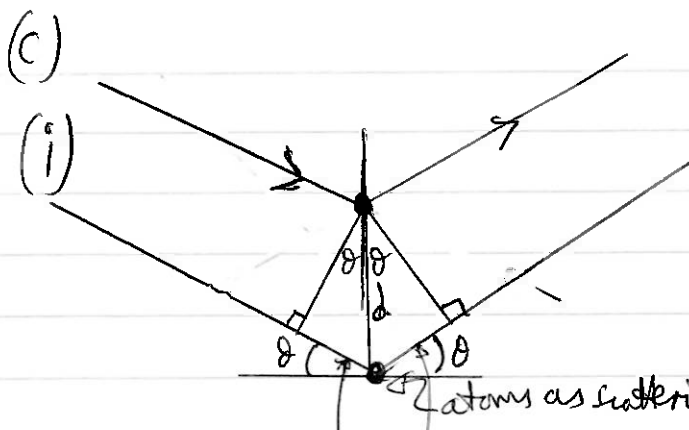
(iii) For $h = 0.5 \text{ m}$

$$pd = \frac{2 \times 0.5 \times 80}{1500} = \frac{d}{150} = 0.053 \text{ m}$$

$$\approx \frac{1}{80} \lambda$$

So the π phase shift produces destructive interference
and hence a minimum. ✓

(H)



✓ DIAGRAM

path difference = $d \sin \theta + d \sin \theta$
 = $2d \sin \theta$ ✓ *deply shown. what the pd is.*

and for constructive interference the pd is $n\lambda$ ✓ *statement*
 $\therefore n\lambda = 2d \sin \theta$ (No mark for answer) ✓

(ii) 1 mole of salt has a volume of $\frac{58.4 \text{ (cm}^3\text{)}}{2.17 \text{ (g)}} \left(\frac{\text{g}}{\text{mol}}\right)$
 = $26.9 \times 10^{-6} \text{ m}^3$ ✓

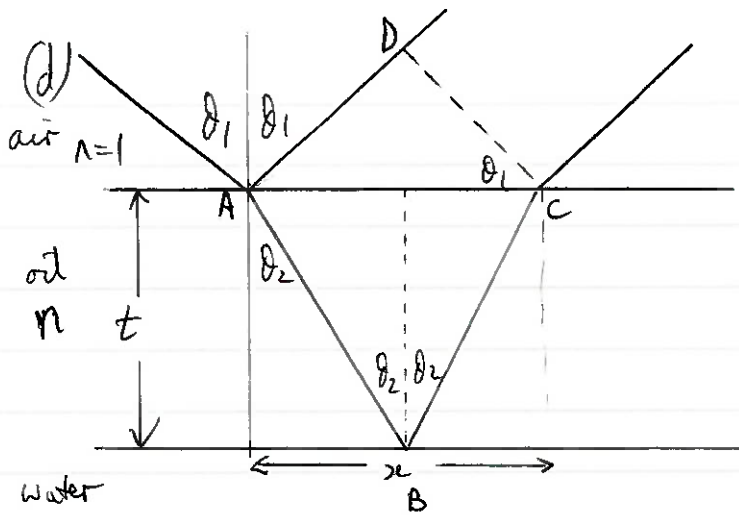
This contains N_A salt "molecules", for $2N_A$ atoms ✓
 factor 2 ✓

$\therefore d = \sqrt[3]{\frac{26.9 \times 10^{-6}}{2 \times 6.02 \times 10^{23}}}$
 = $2.82 \times 10^{-10} \text{ m}$ ✓

(iii) substituting in $n\lambda = 2d \sin \theta$
 $n\lambda = 2 \times 2.82 \times 10^{-10} \sin 25^\circ$ ✓

$n=1 \quad \lambda = 2.4 \times 10^{-10} \text{ m}$ ✓ *assume n=1*
 ($n=2 \quad \lambda = 1.2 \times 10^{-10} \text{ m}$)
 (etc.)

②



Correct refraction ✓
 AD marked or stated for λ ✓
 ABC marked or stated for λ ✓

path difference = $ABC - AD$ ✓ Statement.

$$\sin \theta_1 = n \sin \theta_2$$

$$\tan \theta_2 = \frac{x}{2t}$$

$$\therefore x = 2t \frac{\sin \theta_2}{\cos \theta_2}$$

$$\begin{aligned} \text{path in air (AD)} &= x \sin \theta_1 \\ &= 2t \frac{\sin \theta_2}{\cos \theta_2} \cdot \sin \theta_1 \end{aligned}$$

$$\text{Optical path in oil (ABC)} = \frac{2nt}{\cos \theta_2}$$

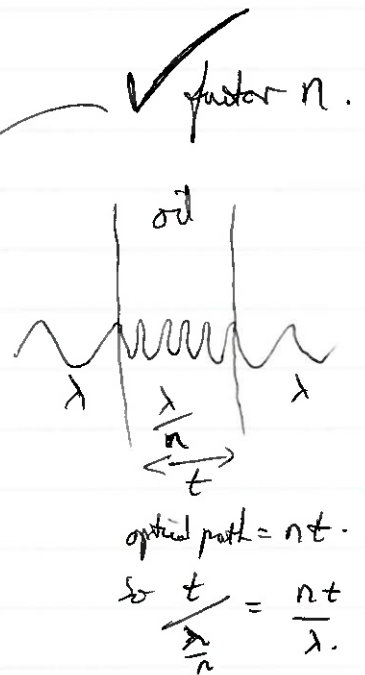
$$\therefore \text{p.d.} = \frac{2t}{\cos \theta_2} (n - \sin \theta_2 \sin \theta_1)$$

$$= \frac{2t}{\sqrt{1 - \sin^2 \theta_2}} \left(n - \frac{\sin^2 \theta_1}{n} \right)$$

$$= \frac{2tn}{\sqrt{1 - \frac{\sin^2 \theta_1}{n^2}}}$$

$$= 2tn \left(1 - \frac{\sin^2 \theta_1}{n^2} \right)^{\frac{1}{2}}$$

$$= \underline{2t \sqrt{n^2 - \sin^2 \theta_1}}$$



π phase change at air/oil interface

No phase change at oil/water interface.

\therefore p.d. for constructive interference is $\frac{\lambda}{2}$ ✓

$$\text{So } \frac{\lambda}{2} = 2t \sqrt{n^2 - \sin^2 \theta_1}$$

$$\frac{410 \times 10^{-9}}{2} = 2t \sqrt{1.5^2 - \sin^2 30}$$

$$t = \underline{7.9 \times 10^{-8} \text{ m}}$$
 ✓

⑦